

Math Problem of the Week  
#4  
Due Friday, October 29, 2010

Hello Animal Explorers,

As you've been learning Africa is home to many of the world's largest animals. This week you'll be using place value to figure out which animal is being described. For you younger kids that haven't learned about place value as much, the ones place is where the numbers 1 through 9 are. In the number 10, the 1 is in the tens place. In 500 the 5 is in the hundreds place, and in 9,000, the 9 is in the thousands place. Using the information under the animals below answer the questions.




Hippopotamus 3,350 pounds,



Lion 550 pounds,



Black Rhinoceros 2,450 pounds,



Elephant 7,700 pounds,





Giraffe 2,800 pounds,



Nile Crocodile 580 pounds.

1. Which animal has the number 8 in the hundreds position? 




---

2. Which animal has 4 thousands less than the elephant, 2 hundreds less than the lion and 3 tens less than the Nile crocodile?  

---

Safari Lottery #3

Circle one of the animals above.

The animal which is picked the most will earn  .  
However, if there is a tie the animal whose name does not appear in either  
of the questions or answers above will win   .

First and Last name \_\_\_\_\_

Room \_\_\_\_\_