

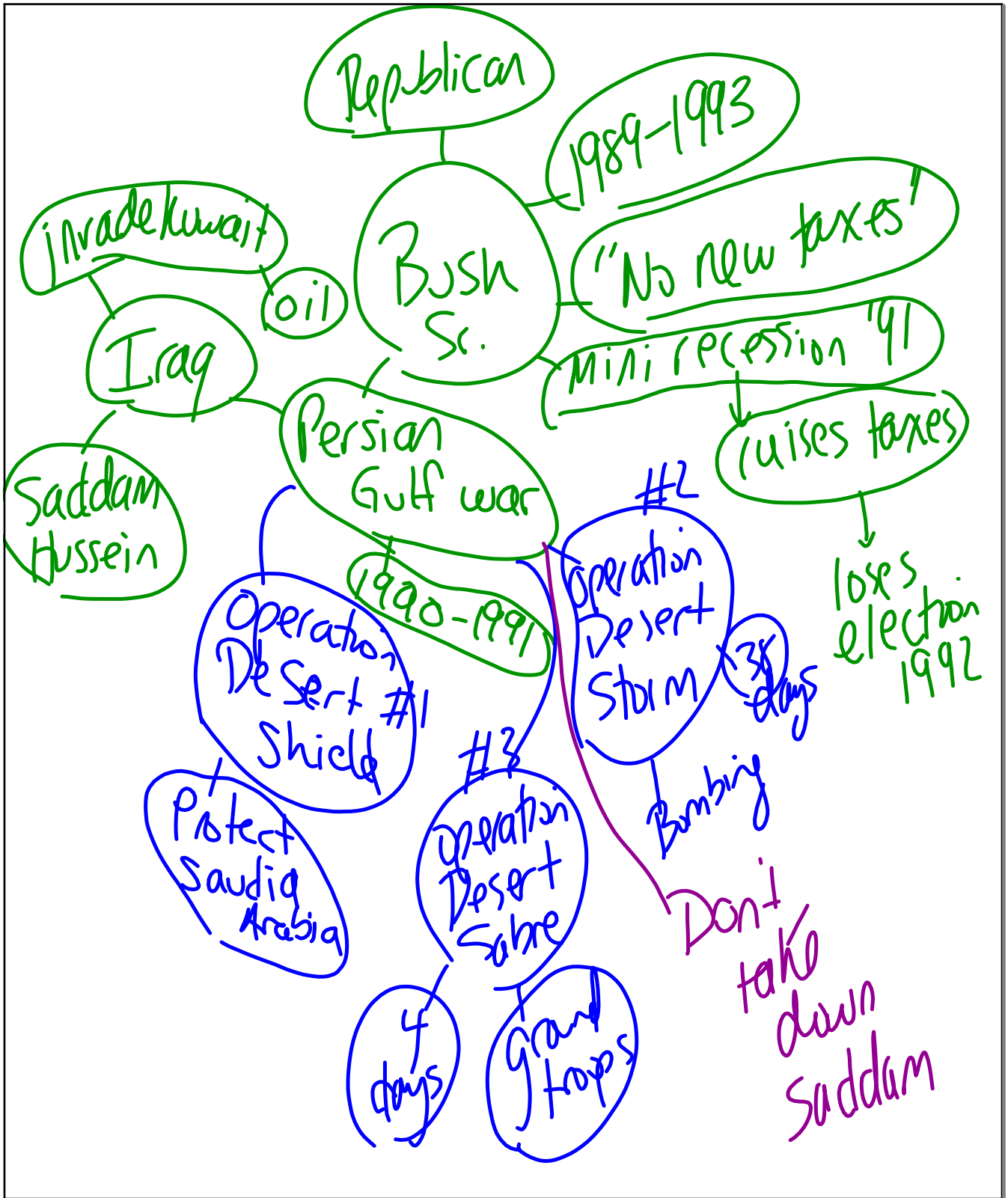
Iran-Contra affair

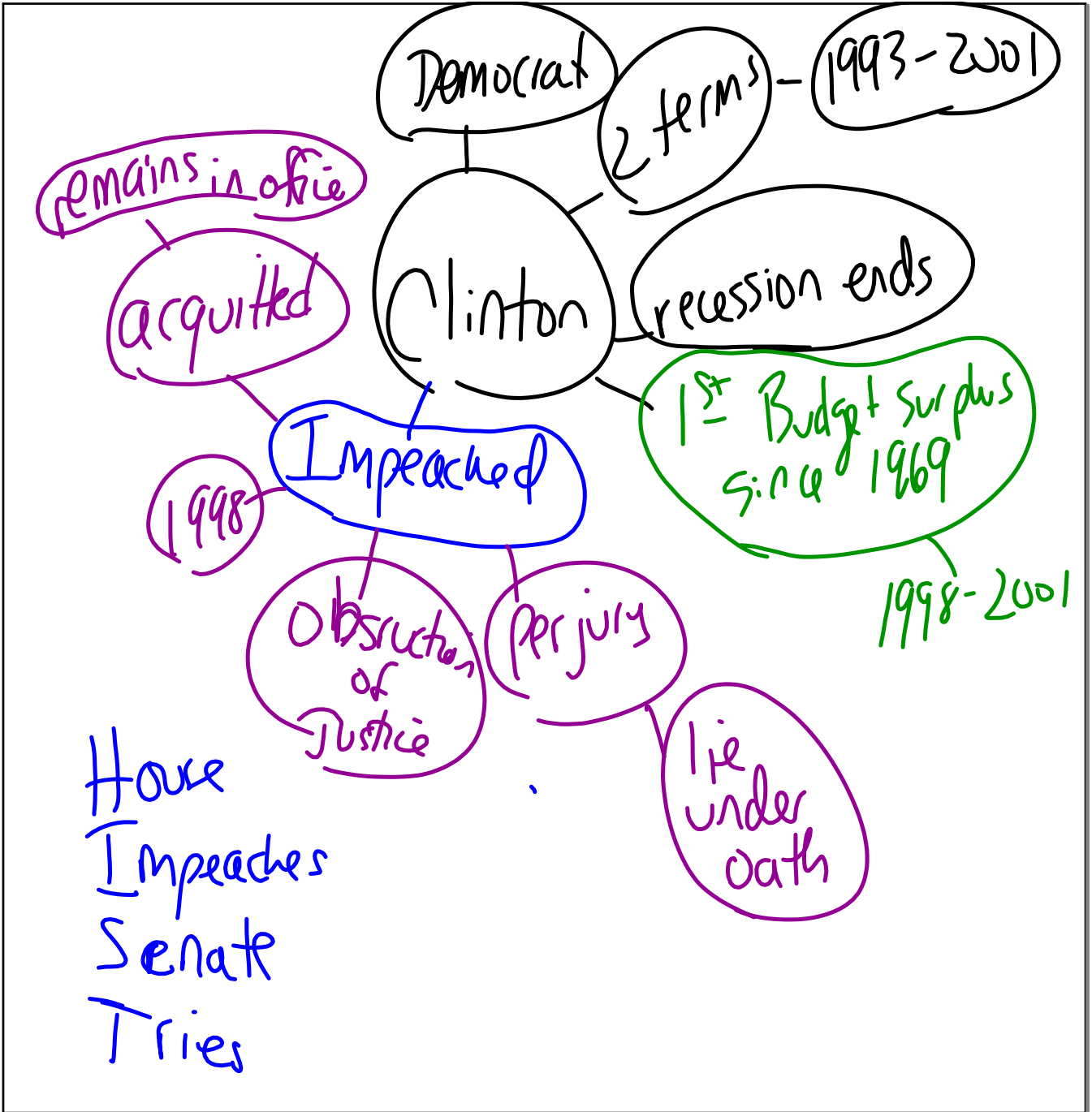
↓  
Nicaraguan guerilla fighters → anti-comm.

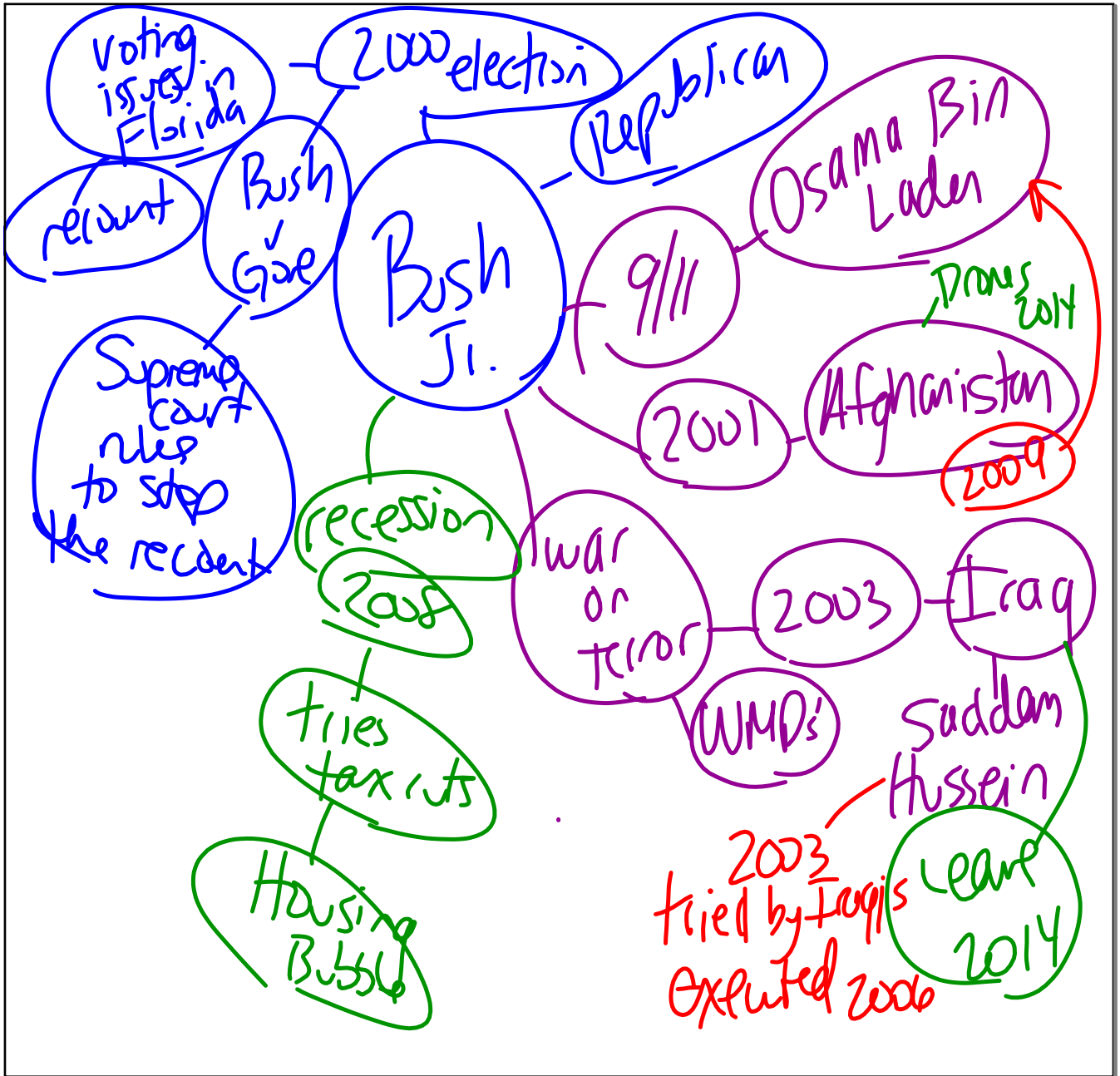
Congress says no aid

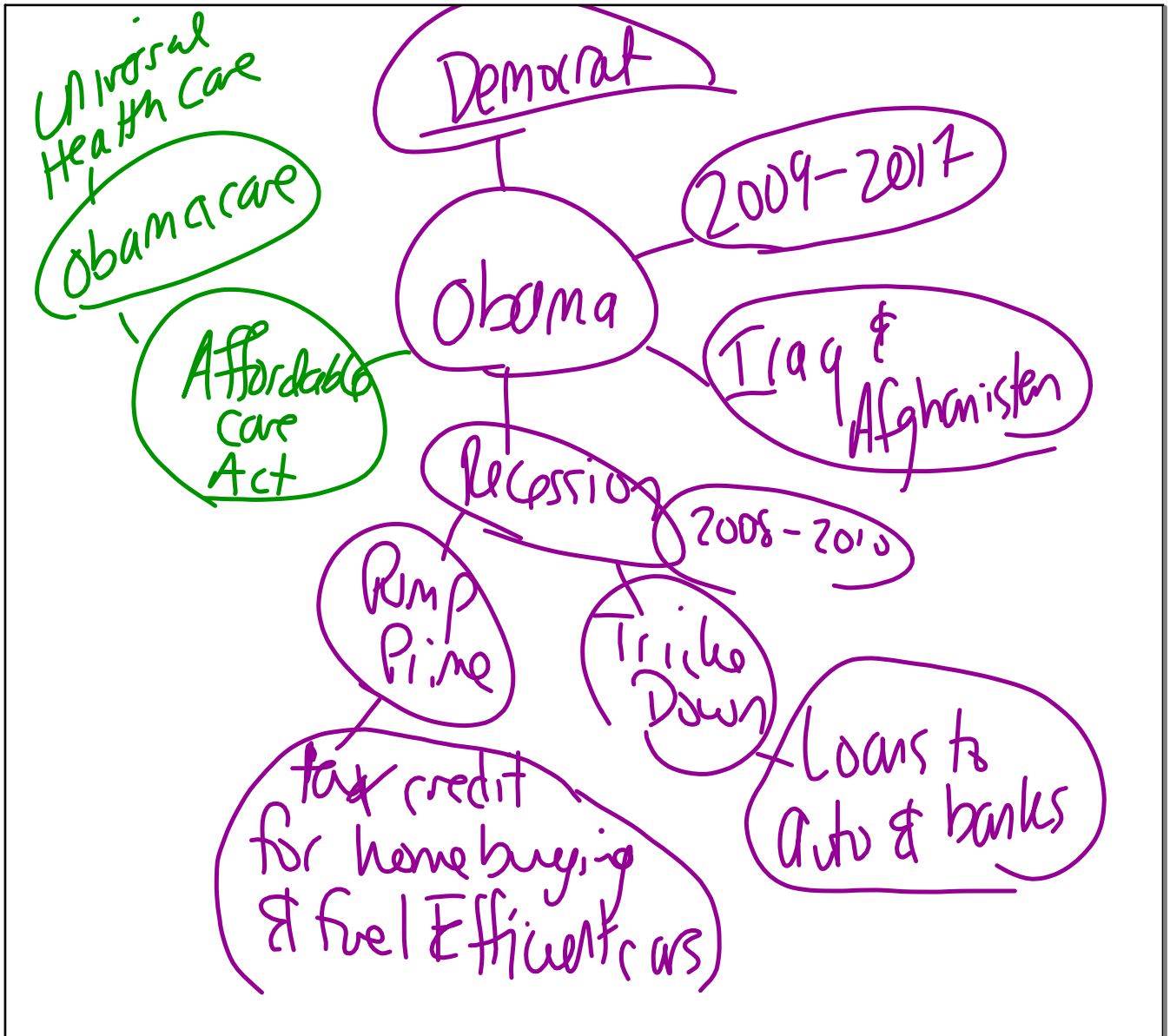
CIA sells weapons to Iran to aid Contras

Ollie North takes the blame









U.S. Hist. & Gov't. - August '18

[8]

Base your answer to question 45 on the cartoon below and on your knowledge of social studies.



Source: Walt Handelsman, Newsday, April 26, 2006

- 45 The main idea of this cartoon is that public approval of the president in 2006 was directly linked to the
- (1) cost of gasoline in the United States
  - (2) success in stopping human rights abuses abroad
  - (3) ability to restrict the flow of illegal drugs
  - (4) amount of the budget surplus



Windows taskbar showing icons for File Explorer, VLC, Chrome, Word, and Outlook. System tray includes network, volume, and power icons, along with the time and date: 3:16 PM 6/13/2019.

Base your answer to question 46 on the cartoon below and on your knowledge of social studies.



Source: Jim Morin, *Miami Herald*, May 10, 2015

46 The main idea of this cartoon is that telephone surveillance by the National Security Administration (NSA)

- (1) has been troubled by technical difficulties
- (2) violates some of the protections of the United States Constitution
- (3) is legal because it protects the privacy of Internet users
- (4) increases hacking of top-secret government information



1st Amend Adams after X12

Wilson

- 47 The Alien and Sedition Acts of 1798 were similar to the Espionage and Sedition Acts passed during World War I because they both
- (1) provided for the draft of men into the military
  - (2) gave the government greater control over the production of goods
  - (3) tried to restrict criticism of and opposition to government policies
  - (4) attempted to justify United States involvement in a foreign war

48 Which set of events in United States history is most closely associated with westward expansion?

- (1) passage of the Indian Removal Act of 1830 and the Compromise of 1877
- (2) issuing the Emancipation Proclamation of 1863 and creation of the Federal Reserve System in 1913
- (3) passage of the Agricultural Adjustment Act of 1933 and creation of the Tennessee Valley Authority in 1933
- (4) passage of the Homestead Act of 1862 and opening of the transcontinental railroad in 1869

49 The National Association for the Advancement of Colored People (NAACP), the Congress of Racial Equality (CORE), and the Southern Christian Leadership Conference (SCLC) are all associated with which movement?


- (1) temperance
- (2) abolition
- (3) civil rights
- (4) environmentalism

MLK

DuBois

Base your answer to question 50 on the cartoon below and on your knowledge of social studies.

Trying to Close the Gap



Source: Art Bimrose, Portland Oregonian (adapted)

50 Which action was an attempt to close the "gap" referred to in the cartoon?

- (1) signing the Yalta Agreement
- (2) passing the Gulf of Tonkin Resolution
- (3) proposing the Strategic Defense Initiative (SDI)
- (4) agreeing to the Strategic Arms Limitation Treaty (SALT)

Nixon

part of tensions







Source: Jim Morin, Miami Herald, July 21, 2006

- 44 This cartoonist is critical of the leadership of President George W. Bush and Vice President Richard B. Cheney for
- (1) supporting the clear-cutting of forests
  - (2) overusing the presidential veto power
  - (3) weakening the system of checks and balances
  - (4) waging the war in Iraq

Isolation

Farmers - oppressed by business

- 45 Which presidential action was most consistent with the ideas presented by President George Washington in his Farewell Address?
- (1) President James Monroe's proclamation of the Monroe Doctrine in 1823
  - (2) President James Polk's policy toward Mexico in 1846
  - (3) President William McKinley's request for a declaration of war against Spain in 1898
  - (4) President George H. W. Bush's decision to engage in the Persian Gulf War in 1990

- 46 The Populist movement of the 1890s and the civil rights movement of the 1950s and 1960s are similar in that both movements were attempts to
- (1) restrict the power of the executive branch
  - (2) solve the problems brought about by industrialization
  - (3) improve the lives of groups who were oppressed
  - (4) require state governments to promote racial equality

- civil rights only



Source: Herblock, Washington Post (adapted)

Modern  
dress

- 47 The tactics illustrated in the cartoon were most closely associated with
- (1) isolationists supporting neutrality policies during the 1930s
  - (2) government leaders investigating communist activities after World War II
  - (3) increased federal spending for education during the 1960s
  - (4) Congress promoting increased security after the September 11, 2001 attacks

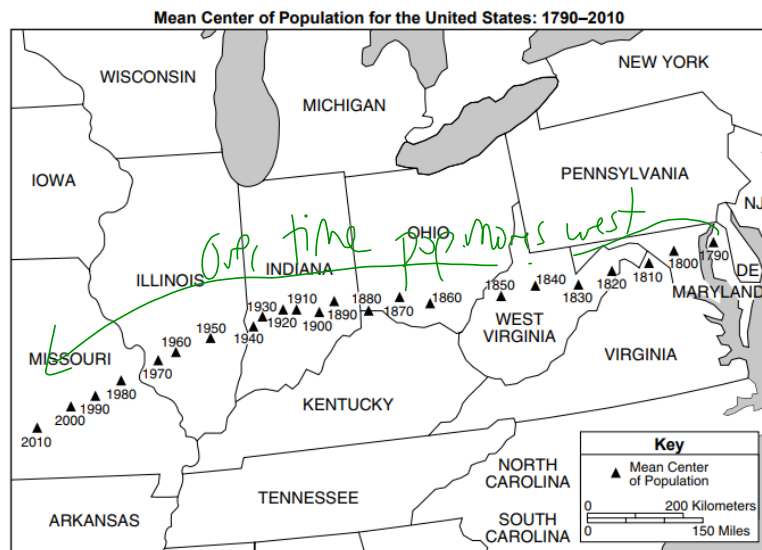
counter culture

- 48 "Flappers" in the 1920s, "beatniks" in the 1950s, and "hippies" in the 1960s are all examples of
- (1) political groups who wanted to limit individual civil rights
  - (2) citizens who wanted to return to simpler lifestyles
  - (3) writers who supported United States foreign policy goals
  - (4) individuals who disagreed with traditional societal values

- 49 The Great Depression and the economic crisis known as the Great Recession (December 2007–June 2009) were similar in that both led to
- (1) a surplus in the federal budget
  - (2) a decrease in federal support for unemployment insurance
  - (3) a limit on the power of the Federal Reserve System
  - (4) an expansion of the federal government's role in stabilizing the economy

new deal  
Bail  
out  
businesses

Base your answer to question 50 on the map below and on your knowledge of social studies.



Source: U.S. Department of Commerce, Economics and Statistics Administration, U.S. Census Bureau (adapted)

50 What has been the principal cause of the population changes shown on the map?

- (1) employment opportunities in northeastern states
- (2) continued westward migration
- (3) enactment of immigration quotas
- (4) movement from farms to cities





Source: Mike Keefe, *The Denver Post*, November 8, 2003

- 45 Which statement most accurately expresses the point of view of the cartoonist?
- (1) Middle Eastern leaders favor isolationism over international cooperation.
  - (2) Middle Eastern leaders prefer representative government to military dictatorship.
  - (3) The peoples of the Middle East are well prepared for democratic rule.
  - (4) The United States version of government is unlikely to work in the Middle East.

Right to know why you are jailed

46 Which constitutional issue was tested by President Abraham Lincoln's suspension of habeas corpus and the Supreme Court case Korematsu v. United States (1944)?

- (1) restriction of civil liberties during wartime
- (2) supremacy of federal laws over state laws
- (3) use of military tribunals during wartime
- (4) limits on antiwar protests

47 Before entry into World War I and before entry into World War II, the United States adopted foreign policies that

- (1) stopped the spread of European aggression
- (2) supported peace efforts of international organizations
- (3) favored democratic nations but were officially neutral
- (4) encouraged war by signing collective security treaties

48 "... They call it a 'negotiated peace.' Nonsense! Is it a negotiated peace if a gang of outlaws surrounds your community and on threat of extermination makes you pay tribute to save your own skins? ..."

— President Franklin D. Roosevelt, Fireside Chat, December 29, 1940

In this quotation, the expression "gang of outlaws" was meant to apply to the

- (1) Maoist rebels in China
- (2) fascist dictators in Europe
- (3) communist revolutionaries in Poland
- (4) North Korean invaders of South Korea

49 Samuel Gompers, John L. Lewis, and Cesar Chavez are best known for their efforts to

- (1) create a universal health-care system
- (2) ensure the profits of farm owners
- (3) expand the rights of workers
- (4) promote the development of big business

United mine workers  
Unions  
United Farm workers

Hitler + Mussolini

Base your answer to question 50 on the table below and on your knowledge of social studies.

Final Election Returns

Election of	Popular Vote		Electoral College
	Total	Percentage	
1876			Votes
Hayes	4,033,497	47.95	185
Tilden	4,288,191	50.98	184
Cooper	78,501	0.90	—
1888			Vote
Harrison	5,449,825	47.82	233
Cleveland	5,539,118	48.61	168
Fisk	249,492	2.19	—
Streeter	146,602	1.29	—
2000			Vote
George W. Bush*	50,456,062	47.89	271
Albert Gore	50,996,582	48.40	266
Ralph Nader	2,858,843	2.71	—

\*Elected by Electoral College


Source: 1876 and 1888, *Presidential Elections, 1789–2000*. CQ Press, 2002; 2000, "Historical Election Results," U.S. Electoral College, National Archives (adapted)

50 Which conclusion most accurately explains the election results found on this table?

- (1) A candidate can win the popular vote and lose the election.
- (2) Candidates who won the popular vote won the presidency.
- (3) The House of Representatives chose the winner in each of these elections.
- (4) The Supreme Court determined the outcome of each of these elections.

Electoral  
vote  
clicks  
Pres.





Source: Tom Toles, Washington Post, April 25, 2007

41. Which statement best supports the cartoonist's view in 2007 about global warming?

- (1) The federal government has been slow to take action on global warming.
- (2) Most people support efforts to address global warming.
- (3) Dealing with global warming is too expensive.
- (4) Global warming is damaging the ozone layer.

42. Since the presidency of Ronald Reagan, the Republican Party has generally tried to deal with economic problems by supporting

- (1) lower taxes and reduced government spending
- (2) the elimination of free trade and the free-market system
- (3) deficit spending and decreased military spending
- (4) increased social spending and strict regulation of the stock market


43. Which statement about the Hurricane Katrina disaster (2005) is an opinion rather than a fact?

- (1) The levee system in New Orleans failed.
- (2) The federal government did not do enough to aid the victims.
- (3) The federal government was criticized for its initial response to the emergency.
- (4) The Federal Emergency Management Agency (FEMA) provided housing for victims.

Blaamed FEMA for not reacting fast enough



Base your answer to question 44 on the cartoon below and on your knowledge of social studies.



Source: Clay Bennett, *Chattanooga Times Free Press*, November 5, 2008

44 According to the cartoonist, one important result of the election of President Barack Obama in 2008 was that

- (1) public facilities in the South were finally integrated
- (2) the executive branch of government gained power over the legislative branch
- (3) a racial barrier in government had been broken
- (4) racial discrimination was legally eliminated in the United States

45 The practice of yellow journalism most influenced United States entry into which war?

- (1) War of 1812
- (2) Spanish-American War
- (3) World War II
- (4) Persian Gulf War

46 The suspension of habeas corpus during the Civil War and the passage of the USA Patriot Act during the war on terror both illustrate the national government's willingness to

- (1) uphold the rights of minority citizens
- (2) tolerate criticism of its wartime policies
- (3) expand the power of the states to prosecute radical groups
- (4) limit civil liberties when the nation is facing immediate danger

47 The Washington Naval Conference (1921), the Kellogg-Briand Pact (1928), and the Neutrality Acts of the 1930s were all attempts by the United States to

- (1) increase military spending
- (2) show support for the United Nations
- (3) assume a position of world leadership
- (4) avoid policies likely to lead to war

48 The baby boom following World War II resulted in the

- (1) development of urban unrest in the 1950s
- (2) need to increase the number of schools in the 1960s
- (3) migration from cities to farms in the 1970s
- (4) need to decrease the number of nursing homes in the 1980s

- *Tinker v. Des Moines School District* (1969)
- *New Jersey v. T.L.O.* (1985)
- *Vernonia School District v. Acton* (1995)

Which similar issue was addressed in these Supreme Court cases?

- (1) balancing the rights of students with the need of schools to maintain order
- (2) allowing principals to determine students' constitutional rights
- (3) denying public school districts the authority to allow prayer in schools
- (4) giving state legislatures the power to fund charter schools

50 President John F. Kennedy and President Ronald Reagan both visited the Berlin Wall in order to

- (1) assess the military strength of the Soviet Union
- (2) prepare for an invasion of the Soviet Union
- (3) demonstrate the commitment of the United States to maintain freedom in Western Europe
- (4) challenge the North Atlantic Treaty Organization (NATO) nations that were supported by the Soviet Union

Disarmament

Today -> more nursing homes

Vietnam "Black Protest Arm band"

Locker searches allowed

Drug testing School athletes allowed

